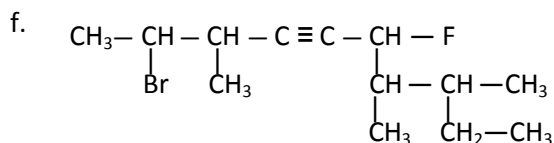
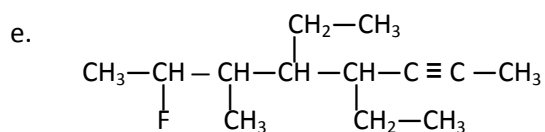
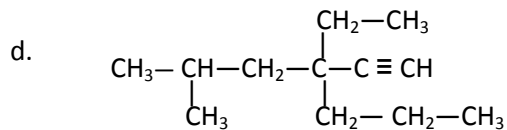
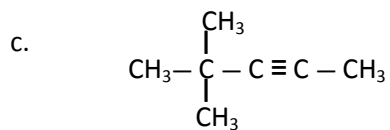
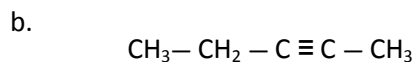


Alkynes – Naming and Drawing

1. Name each alkyne.



2. Draw a condensed structural diagram for each compound.

a. 2-propyne

d. 2,5,7-trimethyl-3-octyne

b. 4,5-dimethyl-2-heptyne

e. 2,2-dibromo-5-chloro-3-hexyne

c. 3-ethyl-4-methyl-1-hexyne

f. 3-chloro-3,4-dimethyl-1-heptyne